



2025

Summer Math Homework Package

Grade 1 → 2

It is important that you keep practicing your mathematical Knowledge over the summer to be ready for **2nd grade**.

In this package you will find a calendar of activities for the month of July and August.

What should you do?

- Take a new notebook or use this year math notebook for every-day practice;
- Start each day with vocabulary words: copy each word, find and write the meaning of each word in your notebook.
- If definition is difficult, draw a picture or give an example instead (for example, list all the coins to explain “money”).
- You may use the internet to find the meaning of each word you do not know:

<http://www.amathsdictionaryforkids.com/MathsChartsPDFs/Operations.pdf>

https://dynamiclearningmaps.org/sites/default/files/documents/ERP/dlm_math_glossary.pdf


- Solve the problem of the day with full explanation;
- Have the date of the entry. Have a clear and complete answer. Be neat and organized.
- If it is hard for you to do it every day, do the week’s assignment over the weekend.

Do not forget to bring your notebook to school on September 2, 2025- the first school day.

Have a Great Summer!!


Big Apple Academy

Mathematics Department

<div data-bbox="224 191 465 284"> <div>July</div> </div> <div data-bbox="224 331 304 357">Dozen</div> <div data-bbox="362 411 474 437">Monday</div>	<div data-bbox="506 172 631 236">Leap Year Fraction</div> <div data-bbox="551 411 663 437">Tuesday</div>	<div data-bbox="779 172 949 236">Quadrilateral Perimeter</div> <div data-bbox="824 411 967 437">Wednesday</div>	<div data-bbox="1055 172 1158 277">Sum Product Cone</div> <div data-bbox="1149 411 1274 437">Thursday</div>	<div data-bbox="1350 172 1525 277">Bar Graph Cube Picture Graph</div> <div data-bbox="1467 411 1552 437">Friday</div>	<div data-bbox="1630 172 1767 236">Congruent Estimate</div> <div data-bbox="1724 411 1843 437">Saturday</div>	<div data-bbox="1917 172 2116 213">Vocabulary</div>
<div data-bbox="224 464 394 569">Date Days of week Decrease</div>	<div data-bbox="506 464 667 528">Digit Number Difference</div>	<div data-bbox="779 464 882 528">Addend Factor</div>	<div data-bbox="1055 464 1238 528">Even number , Odd number</div>	<div data-bbox="1350 464 1413 569">Flip Slide Turn</div>	<div data-bbox="1630 464 1854 569">Decade Word form of the number</div>	<div data-bbox="1917 464 2116 595">Summer Home Work for FUN</div>
<div data-bbox="224 756 452 903">Sphere Surface Face (flat surface) Rectangular prism</div>	<div data-bbox="506 756 591 861">Vertex Edge Angle</div>	<div data-bbox="779 756 900 861">Pentagon Hexagon Triangle</div>	<div data-bbox="1055 756 1301 903">Heptagon Octagon Expanded form of a number</div>	<div data-bbox="1350 756 1476 861">Rhombus Trapezoid Diagonal</div>	<div data-bbox="1630 756 1805 861">Pyramid Parallelogram Prism</div>	<div data-bbox="1917 756 2116 858">Incoming 2nd Grade</div>
<div data-bbox="224 1048 291 1185">Inch Foot Yard Mile</div>	<div data-bbox="506 1048 640 1112">Tally Tally chart</div>	<div data-bbox="779 1048 1003 1153">Number sentence Meter Centimeter</div>	<div data-bbox="1055 1048 1189 1153">Vertical Horizontal Twice</div>	<div data-bbox="1350 1048 1516 1112">Doubles Related facts</div>	<div data-bbox="1630 1048 1888 1153">Century Commutative Property of Addition</div>	<div data-bbox="1939 1121 2096 1272">  </div>


Big Apple Academy

Mathematics Department

July 915-108= 572-194= 360- 57= Monday	Marta picked 49 red flowers and 133 pink flowers. How many flowers did Marta pick in all? Tuesday	The cook needs a dozen eggs to make a cake. If he has 8 eggs, how many more does he need? Wednesday	Four students brought their teacher flowers. If each one gave the teacher 9 flowers, how many did she get? Thursday	Jay has 95 cents. He spent a quarter and a dime. How much money does he have left? Friday	Carnival ride tickets are 10 for \$1.00. How many can Sue buy for \$4.00 ? Saturday	2nd Grade
Rob found a sale on dog food. Each can cost 40 cents. How much did he pay for five cans?	510 - 125 = 3,478+2,795= 700-367= 503-347= 599+385=	Sara cut five brownies into fourths. How many pieces did she have?	87 students are going on a trip. A bus holds 30 children. How many buses will be needed?	Write the missing numbers ___ 368, 369, ___, ___, ___	Fine the rule and continue the pattern 75, 69, 63, ___, ___	Summer Home Work for FUN
Tickets cost \$3 for children and \$7 for adults. How much will a family of 3 children and 2 adults pay?	Expand the numbers: 78= ___+___ 527= ___+___+___ 305= ___+___	If one week has seven days, how many days are there in seven weeks?	If Tanya eats 3 pieces of fruit every day, how many days will 18 pieces of fruit last?	Circle the odd numbers 23 , 36, 67, 70, 101, 2,009	Solve 23 - 7 = 10 + ___ 12 + 9 = 22 - ___	
Write all the even numbers that are more than 30 and less than 40.	Count by 5 175, 180, 185, ___, ___, ___, ___, ___	Show 3 ways of making 93 cents.	In Wilson School, there are 537 students, 309 students are girls. How many boys are in Wilson School?	3 hours = ___min 3years___months 4 days= ___ hours	Kelly wants to give 15 flowers to her three friends. How many flowers will each of them get?	

Big Apple Academy

Mathematics Department

August	Greater than Less than Least Greatest	Fact Family Rounding	Equal parts Halves Thirds Quarters	Hour Half-hour Quarter-hour	Dollar sign (\$) Equation	Vocabulary
	Monday	Tuesday	Wednesday	Thursday	Friday	Saturday
Hour hand, Minute hand, Calendar	a.m. p.m. Minute	Thermometer Second (a unit of time)	Regrouping Place value	Match Count on Count back	Height Length Width	Summer Homework for FUN
Distance Intersect	Multiplication Multiple	Related subtraction facts Amount of money	Numerator Denominator	Cent Dollar Coins Bills	Decagon Symmetry	
Standard form Solid figure	Increase Number line Hundred charts	Rectangular prism Square pyramid Similar = alike	Compare Factors	Number Operations Commutative/order property of multiplication	Different ways of checking your answer	
Straight Curved	Estimate Related facts	Right Left				

Big Apple Academy

Mathematics Department

Kevin's birthday is in 3 weeks and 4 days. How many days until his birthday?	What do a cone and a sphere have in common? How are they different?		Round each number to the nearest ten. 48 - ____ 85- ____ 51 - ____	Put the numbers in order from greatest to least. 368, 328, 338, 358, 348	346+563+126 = 543+457+732= 234+567+891=	Incoming 2nd Grade
Monday	Tuesday	Wednesday	Thursday	Friday	Saturday	
What two months come after October? How many days do they have together	Draw a pentagon. Draw an oval to the left of the pentagon and a trapezoid to the right of the pentagon.	How much money in.. 5 Quarters? ____ 5 Dimes? ____ 5 Nickels? ____ 5 pennies? ____	Johnny had 51 cents. He spent 27 cents. How much does he have left?	How much total in 3 quarters and 6 dimes=?	Mary has 5 round and 4 square buttons. What fraction of the buttons are square?	Summer Homework for FUN
A fisherman caught 24 fish. He gave the same number of fish to 6 of his friends. How many fish did each friend get?	With \$1.00 , can Henry buy a 69 cents toy and a 29 cents ball?	The greatest two digit number is____ The greatest two digit even number is____ The greatest three-digit number is____	2nd grade classes are going on a trip. 2 classes each have 25 students and one has 23 students. How many students are going on the trip?	2×4= 3×5= 4×6= 5×9= 6×7= 7×8= 4×6=	Mel had 67¢. Then he was given a quarter by his mom and 43¢ by his dad. How much money does he have now?	
Yesterday Bob saw 27 ducks in the park. Today he saw 18 more ducks than yesterday. How many ducks did Bob see in all?	Alex's birthday is on May 10th. Paul's birthday is two weeks later. What is the date of Paul's birthday?	Fred read 21 books last year. Betsy read 14 books. How many more books did Fred read than Betsy?	I am an even number between 0 and 9. I'm less than 6 and more than 3. What number am I?	The game lasted 3 hours and 16 minutes. It began at 1:00 PM. At what time did the game end ?	Bananas are on sale, two for 25¢. How much will 6 bananas cost?	
What do a cube and a square pyramid have in common? How are they different?	A box of popcorn cost 50¢. How much will popcorn cost for four children?	The book has 222 pages. I read 185 pages. How many pages are left for me to read?				